

New wave mental maths



This book belongs to



THURSDAY

What is the time?

Angle A = _____

Which mixed number is shaded?

$3\frac{1}{3}$ $2\frac{2}{3}$ $2\frac{1}{3}$

What shape is this?

The wizard's special potion needs 225 mL of pineapple juice. Shade the amount.

PROBLEM-SOLVING

MONDAY

Was \$50 Now \$ _____

Was \$90 Now \$ _____

TUESDAY

2 boys had a basketball contest for shooting hoops. (Best of 5 shots)

Who won? _____

Who scored the most with their left hand? _____

right hand? _____

Player	Right hand	Left hand
Liam	5	1
Conor	4	3

WEDNESDAY

A fast train travels at 400 km/h. After a $2\frac{1}{2}$ -hour non-stop journey, what distance has the train travelled? _____ km

THURSDAY

What is the angle shown?

FRIDAY REVIEW

Use the abacus to show 3.054.

Rotate a $\frac{3}{4}$ turn clockwise?

What is the rpm for this V8 car engine?

(a) 5
(b) 50
(c) 500
(d) 5000
(e) 0.005

Which triangle is shown?

isosceles scalene

AFTER SCHOOL MUSIC LESSONS 6B

Instrument	Students
Piano	8
Guitar	6
Violin	4
Drums	5

How many students from 6B were surveyed?

What fraction and percentage of students is learning guitar?

 R.I.C. Publications
Low Resolution Images
Display Copy

Published by
R.I.C. Publications® Pty Ltd
PO Box 332, Greenwood
Western Australia 6924

© Eddy Krajcar 2011

First published 1999
Rewritten and reprinted in 2011
Revised and reprinted 2012
Reprinted 2013, 2014, 2015, 2016
Revised 2017

RIC-1705
ISBN 978-1-921750-02-1

Copyright Notice

No part of this book may be reproduced in any form or by any means, electronic or mechanical, including photocopying or recording, or by an information retrieval system without written permission from the publisher.

FOREWORD

New wave mental maths is a series of student workbooks, written to provide a comprehensive and structured daily mental maths program for students in Australian primary schools.

This new revised edition links to the Australian Curriculum Mathematics strands of Number and Algebra, Measurement and Geometry, and Statistics and Probability, and is designed to:

- encourage and develop students' mental calculation concepts and skills
- develop and reinforce students' problem-solving strategies through new, dedicated problem-solving questions
- develop and maintain students' speed of recall
- introduce students to, and help them practise and understand, a range of mathematics vocabulary.

Assessment activities are provided for students to assess, monitor and record their own performance on a weekly basis. A separate **teachers guide** is available, that accompanies the **New wave mental maths** series. This book contains guidelines to help develop mental strategies, suggestions for classroom use, assessment tools, a list of the concepts developed and answers.

CONTENTS

Student record sheet	iv–v	Week 21	62–64
Week 1	2–4	Week 22	65–67
Week 2	5–7	Week 23	68–70
Week 3	8–10	Week 24	71–73
Week 4	11–13	Week 25	74–76
Week 5	14–16	Week 26	77–79
Week 6	17–19	Week 27	80–82
Week 7	20–22	Week 28	83–85
Week 8	23–25	Week 29	86–88
Week 9	26–28	Week 30	89–91
Week 10	29–31	Week 31	92–94
Week 11	32–34	Week 32	95–97
Week 12	35–37	Week 33	98–100
Week 13	38–40	Week 34	101–103
Week 14	41–43	Week 35	104–106
Week 15	44–46	Week 36	107–109
Week 16	47–49	Week 37	110–112
Week 17	50–52	Week 38	113–115
Week 18	53–55	Week 39	116–118
Week 19	56–58	Week 40	119–121
Week 20	59–61	Maths facts	122–128

STUDENT RECORD SHEET

Date	Date	Date	Date	Date	Date	Date	Date	Date	Date
Week 1	Week 2	Week 3	Week 4	Week 5	Week 6	Week 7	Week 8	Week 9	Week 10
M	M	M	M	M	M	M	M	M	M
Tu.	Tu.	Tu.	Tu.	Tu.	Tu.	Tu.	Tu.	Tu.	Tu.
W	W	W	W	W	W	W	W	W	W
Th.	Th.	Th.	Th.	Th.	Th.	Th.	Th.	Th.	Th.
PS	PS	PS	PS	PS	PS	PS	PS	PS	PS
F	F	F	F	F	F	F	F	F	F

Date	Date	Date	Date	Date	Date	Date	Date	Date	Date
Week 11	Week 12	Week 13	Week 14	Week 15	Week 16	Week 17	Week 18	Week 19	Week 20
M	M	M	M	M	M	M	M	M	M
Tu.	Tu.	Tu.	Tu.	Tu.	Tu.	Tu.	Tu.	Tu.	Tu.
W	W	W	W	W	W	W	W	W	W
Th.	Th.	Th.	Th.	Th.	Th.	Th.	Th.	Th.	Th.
PS	PS	PS	PS	PS	PS	PS	PS	PS	PS
F	F	F	F	F	F	F	F	F	F

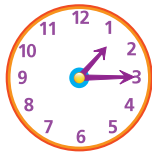
STUDENT RECORD SHEET

Date	Date	Date	Date	Date	Date	Date	Date	Date	Date
Week 21	Week 22	Week 23	Week 24	Week 25	Week 26	Week 27	Week 28	Week 29	Week 30
M	M	M	M	M	M	M	M	M	M
Tu.	Tu.	Tu.	Tu.	Tu.	Tu.	Tu.	Tu.	Tu.	Tu.
W	W	W	W	W	W	W	W	W	W
Th.	Th.	Th.	Th.	Th.	Th.	Th.	Th.	Th.	Th.
PS	PS	PS	PS	PS	PS	PS	PS	PS	PS
F	F	F	F	F	F	F	F	F	F

Date	Date	Date	Date	Date	Date	Date	Date	Date	Date
Week 31	Week 32	Week 33	Week 34	Week 35	Week 36	Week 37	Week 38	Week 39	Week 40
M	M	M	M	M	M	M	M	M	M
Tu.	Tu.	Tu.	Tu.	Tu.	Tu.	Tu.	Tu.	Tu.	Tu.
W	W	W	W	W	W	W	W	W	W
Th.	Th.	Th.	Th.	Th.	Th.	Th.	Th.	Th.	Th.
PS	PS	PS	PS	PS	PS	PS	PS	PS	PS
F	F	F	F	F	F	F	F	F	F

MONDAY

1. What is the time?



2. $9 + 9 + 9 =$ _____

3. $1\frac{3}{4}$ is closer to: 1 2

4. Mark the parallel sides.



5. $\$5.00 - \$3.50 =$ _____

6. Halve 1250. _____

7. 25, 50, 75, _____, 125

8. $\frac{1}{2} > \frac{1}{3}$ true false

9. $49 \times 9 =$

- $(50 \times 9) - 1$
- $(50 \times 9) - (1 \times 9)$
- $(50 \times 9) + (1 \times 9)$

10. 1 m = _____ cm

11. Which is symmetrical?

- A G N S

12. Write *ten thousand and ten* as a numeral.

13. What is the length of \overline{AB} ?



_____ mm

14. Round 1151 to the nearest hundred. _____

15. $2.5 \times 2 =$ _____

16. 96, 90, _____, _____, 72, 66

17. Name this 3D object.



18. Does sunset occur in the am or pm?

19. $90 - 33 =$ _____

20. In which season is July?

TUESDAY

1. Write the next four multiples of 3.

27, 30, 33, 36, _____, _____, _____, _____

2. $2\frac{4}{5}$ is closer to: 2 3

3. In which season is October?

4. A truck driver travelled 32 km from the sign towards Melbourne.



How many kilometres are left to travel? _____

5. $8 + 8 + 8 =$ _____ $= 3 \times 8$

6. $500 + 700 =$ _____

7. $\$5.00 - \$2.90 =$ _____

8. $2091 - 100 =$ _____

9. What is the speeding fine?

- 5–12 km/h \$75
- 13–19 km/h \$150
- 20–27 km/h \$200



10. Write *one hundred and one thousand* as a numeral.

11. $70 \times 9 =$ _____

12. $69 \times 9 =$ _____

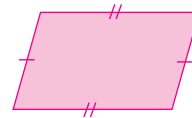
13. 1 cm = _____ mm

14. A third of 27 is:

- $27 \div 3$ $27 - 3$
- 3×27 $\frac{3}{27}$

15. This quadrilateral with no right angles is a:

- rectangle
- parallelogram
- rhombus



16. $\frac{1}{2} > \frac{1}{6}$ true false

17. $0.9 \times 10 =$ _____

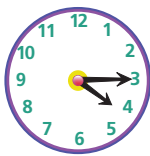
18. 36, _____, 28, 24, 20, _____

19. Is Z symmetrical? _____

20. 1 kg = _____ g



1. What is the time? _____



2. $\$5.00 - \$4.40 =$ _____

3. Is $3\frac{4}{10}$ closer to 3 or 4? _____

4. $\frac{3}{100} = 0.\text{_____} = \text{_____}\%$

5. Show as a $\frac{1}{4}$ turn clockwise.

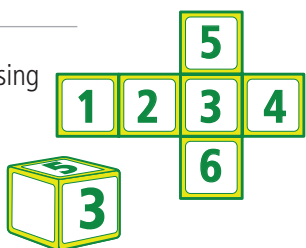


6. A quarter of 40 is:

$40 - 4$ $40 \div 4$ $\frac{4}{40}$ 40×4


7. $60 + 60 + 60 =$ _____

8. What number is missing from the cube face?

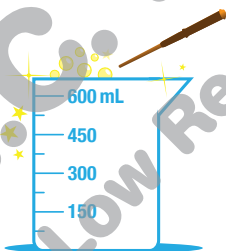


9. $491 \square 10 = 49.1$

10. $1 \text{ km} = \text{_____} \text{ m}$

11. If 6 apples = 1 kg,  how many weigh 4 kg? _____

12. The wizard's special potion needs 225 mL of pineapple juice. Colour this amount.



13. $25 \times 16 \times 4 =$ _____

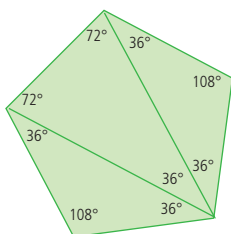
14. $3 \times 8 =$ _____

15. $30 \times 8 =$ _____

16. $0.8 \times 10 =$ _____

17. This regular pentagon has:

- scalene triangles.
- isosceles triangles.
- equilateral triangles.



18. $\frac{1}{2} < \frac{1}{5}$ true false

19. $1 \text{ t} = \text{_____} \text{ kg}$

20. $6\sqrt{96} =$ _____

1. $9.5 \times 2 =$ _____



2. Rotate a $\frac{1}{2}$ turn clockwise.

3. Is $2\frac{2}{3}$ closer to 2 or 3? _____

4. $0.4 \times 100 =$ _____

5. $-4 \quad -3 \quad \mathbf{A} \quad \mathbf{B} \quad 0 \quad 1 \quad 2 \quad 3$

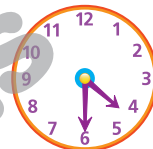


A = _____ B = _____

6. 2000, _____, 1300, 950

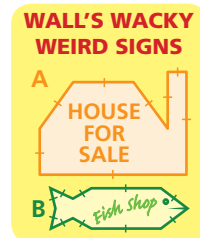
7. $1300 - 950 =$ _____

8. What is the time? _____



9. Write *one quarter* as a fraction. _____

10. Name the irregular polygons used for Wall's wacky weird signs.



(a) A is an _____.

(b) B is a _____.

11. $1 \text{ m} = \text{_____} \text{ cm}$

12. $9 \times 3 =$ _____

13. $90 \times 3 =$ _____

14. Alicia received 45c change from \$5.

What amount did she spend? _____

15. Which spinner is least likely to sum to 7?



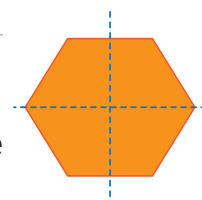
16. Triangular numbers! Draw the next in this sequence.



17. In which season is April? _____

18. Write $\frac{1}{2}$ as a decimal. _____

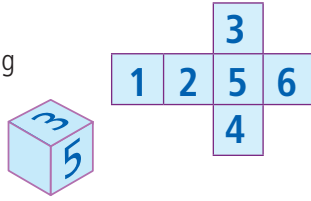
19. Draw 4 more lines of symmetry.



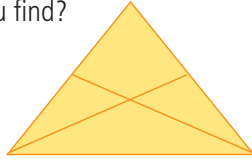
20. $\frac{1}{4} > \frac{1}{2}$ true false

Monday

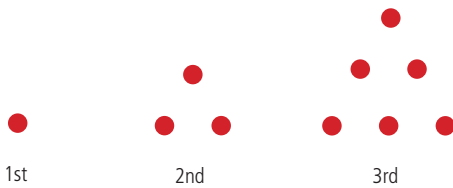
1. Look at the net.
Which number is missing from the blank face of the cube?



2. How many triangles can you find?



Tuesday



1. What is the 6th triangular number?

2. What is the 8th triangular number?

Wednesday

1. What is the sum of the numbers not visible on the dice?



2. What is the sum of the numbers on the bottom of the dice?

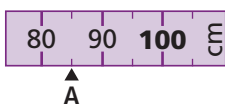


Thursday

1. The obtuse angle of $a =$ _____ $^\circ$



2. The measurement at **A** = _____ mm



1 108, 96, 84, _____

2 $30 \times 7 =$ _____

3 $0.7 \times 10 =$ _____

4 $\$5.00 - \$3.40 =$ _____

5 Write $\frac{1}{4}$ as a decimal.

6 125, 100, _____, 50, 25

7 $406 \div 10 =$ _____

8 $80 - 43 =$ _____

9 $14 \times 25 \times 4 =$ _____

10 The value at A is _____



- 11 What is the speeding fine?



13–19 km/h \$200

20–29 km/h \$300

30–39 km/h \$400

- 12 $2\frac{3}{4}$ is closer to:

2

3

- 13 A quarter of 36 is:

$\frac{4}{36}$

$36 \div 4$

$36 - 4$

36×4

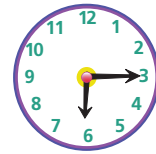
14 $1087 - 100 =$ _____

15 $0.824 \times 100 =$ _____

16 $8.5 \times 2 =$ _____

17 $410 - 70 =$ _____

- 18 What is the time?



- 19 Show as a 90° turn clockwise.



- 20 What season is July in?

21 1 km = _____ m

- 22 The length of one side of this square is _____ cm.

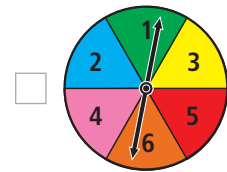
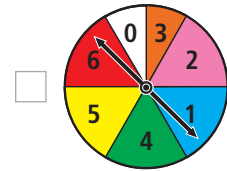
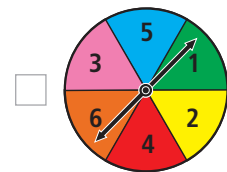


- 23 Which is symmetrical?



- 24 Sunrise is during **am** **pm** time.

- 25 Which spinner is more likely to land on a sum of 7?



1. What is the time? _____



2. $0.7 \times 10 =$ _____

3. $800 + 300 =$ _____

4. $7 + 7 + 7 =$ _____


5. $4 \times 9 =$ _____

6.  - \$1.25 = _____

7. Write *one hundred and eleven thousand, one hundred and ten* as a numeral.

8. Is $9\frac{3}{4}$ closer to 9 or 10? _____

9. Rotate a $\frac{3}{4}$ turn clockwise.



10. $41 \div 5 =$ _____ r _____

11. $45 \times 25 \times 4 =$ _____

12. $\frac{1}{10} > \frac{1}{2}$ true false

13. $487 \div 100 =$ _____

14. $71 - 7 =$ _____

15. Numbers divisible by 8 include 40, 80, 120, 160 and 200. Which set is also divisible by 8?

240, 280, 320, 360

220, 240, 260, 280

240, 260, 300, 320


16. What season is January in? _____

17. This is a:

rhombus

trapezium

parallelogram



18. $800\,000 +$ _____ $= 890\,780$

19. Write $\frac{1}{4}$ as a decimal. _____

20. $30 \times 40 =$ _____

1. Numbers divisible by 6 include 30, 60, 90, 120, 150 and 180. Which set is also divisible by 6?

190, 200, 210, 220

210, 220, 240, 260

210, 240, 270, 300

2. How many weeks are in one year? _____

3. $4 \times 8 =$ _____


4. Halve 1930. _____

5. 10 000, 9750, _____, 9250

6. Write *one hundred thousand and eleven* as a numeral.

7. $\$10.00 - \$7.30 =$ _____

8. Rotate 90° clockwise.



9. $90 \times 9 =$ _____

10. $89 \times 9 =$ _____

11. $53 \div 5 =$ _____ r _____

12. How many \$20 banknotes make up \$1000?



13. Is $8\frac{4}{5}$ closer to 8 or 9? _____

14. $0.5 \text{ km} = 500 \text{ m}$


$0.6 \text{ km} =$ _____ m

15. This is a:

rhombus

trapezium

square



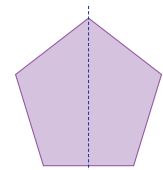
16. $\frac{1}{3} > \frac{1}{8}$ true false

17. Draw the other 4 lines of symmetry.

18. $209 \div 10 =$ _____

19. $600 - 35 =$ _____

20. $60 \times 30 =$ _____



1. What is the time? _____



2. $25 \times 32 \times 4 =$ _____

3. A fifth of 35 = _____

4. A hectare is abbreviated to ha.

1 ha = _____ m^2

5. Write *three hundred and ten thousand, one hundred* as a numeral.

6. $19 + 18 + 17 = 20 + 20 + 20 -$ _____

7. $1200 - 750 =$ _____

8. The value of the ones in the product of 717×7 is:

7

1

9

9. Write $\frac{8}{12}$ in its simplest form. _____

10. Rotate 270° anticlockwise.



11. odd + odd = odd even

12. The rhombus has been transformed by:



translation

reflection

13. Round $3\frac{4}{5}$ to the nearest whole number. _____

14. $0.3 \times 10 =$ _____

15. $38 \div 5 =$ ____ r ____

16. $40 \times 6 =$ _____

17. $\frac{4}{5} < \frac{1}{10}$ true false

18.

$2 \times 3 + 1 = 7$

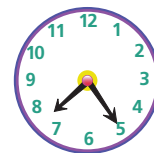
____ \times ____ + ____ = ____

19. What season is this likely to be?



20. $900 - 55 =$ _____

1. What is the time? _____



2. A fifth of 120 = _____

3. $0.937 \times 100 =$ _____

4.



+



_____ \times _____ + _____ = _____

5. What season is it likely to be?



6. $0.2 \times 100 =$ _____

7. $17 + 19 + 29 = 20 + 20 + 30 -$ _____

8. The probability of an A is



9. Write *half a million* as a numeral. _____

10. Match the name and angle.

obtuse _____

acute _____

right angle _____

A



B



C



11. $72 - 8 =$ _____


12. odd + even = odd even

13. Round $7\frac{1}{5}$ to the nearest whole number. _____

14. What is the radius of the circle?

_____ cm

8 cm



15. 1 m = _____ mm

16. 124, 129, 134, _____, 144

17. $20 \times 9 =$ _____

18. $19 \times 9 =$ _____

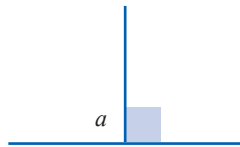
19. $49 \div 5 =$ ____ r ____

20. 2 ha = _____ m^2

Monday

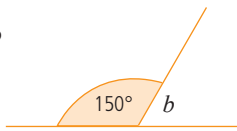
1. What is the size of Angle a ?

_____°



2. What is the size of Angle b ?

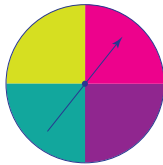
_____°



Tuesday

1. Write the numbers 1, 2, 3 and 4 on the spinner.

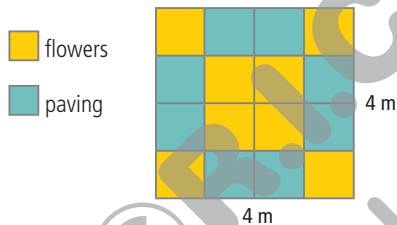
- 1 has a 1 in 4 chance.
- 2 has a 25% chance.
- 3 and 4 have the same chance.



2. Eva saved \$1200 and purchased a new guitar for \$980. Eva bought a new strap for a further \$55. How much does she have after her buying spree?

Wednesday

1. What area do the flowers occupy? _____ m²



2. The paved area cost \$40 per square metre. What is the total cost?

Thursday

1. A non-stop fast train took 4 hours to cover 1000 km. What was the average speed?

_____ km/h

2. On another trip the train travelled a distance of 720 km in 180 minutes. What was the average speed?

_____ km/h



1 A fifth of 75 = _____

2 Write $\frac{1}{2}$ as a decimal.

3 $50 \times 9 = 450$

$49 \times 9 =$ _____

4 The value of the ones for 9193×7 is
_____.

5 $413 \div 100 =$ _____

6 Halve 1410. _____

7 $0.4 \times 10 =$ _____

8 $700 - 250 =$ _____

9 $\frac{1}{3} < \frac{1}{7}$ true false

10 How many \$20 notes make up \$900?



11 $\begin{matrix} \bullet & \bullet & \bullet & \bullet & \bullet \\ \bullet & \bullet & \bullet & \bullet & \bullet \\ \bullet & \bullet & \bullet & \bullet & \bullet \end{matrix} + \begin{matrix} \bullet & \bullet & \bullet \\ \bullet & \bullet & \bullet \end{matrix}$
 $\times \quad +$
= _____

12 $37 \div 5 =$ _____ r _____

13 $30 \times 8 =$ _____

14 $29 \times 8 =$ _____

15 Write *two hundred and ten thousand* as a numeral.

16 odd + odd = _____

17 Write $\frac{8}{10}$ in its simplest form.

18 1 m = _____ mm

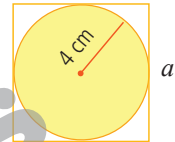
19 1 L = _____ mL

20 Rotate 180°.



21 What is the length of side a of this square?

_____ cm



22 This is a:



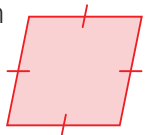
- rhombus
- parallelogram
- trapezium

23 What is the time?



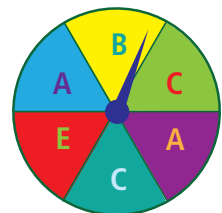
24 This is a:

- trapezium
- rhombus
- square



25 The probability of landing on a vowel is

_____.



English skills practice

F



Weight is a homophone of

wait

Circle the adverbial of place.

They spend all their spare time in the bike shed.

Circle the direct speech.

What a great race! screamed their excited coach.

Circle the compound word that needs a hyphen.

postmortem postmark postcode

This book belongs to



English skills practice (*Book F*)

Published by R.I.C. Publications® 2014
Copyright® by R.I.C. Publications® 2014
ISBN 978-1-922116-76-5
RIC-6225

Reprinted 2015, 2016, 2018

Titles available in this series:

English skills practice (*Book A*)
English skills practice (*Book B*)
English skills practice (*Book C*)
English skills practice (*Book D*)
English skills practice (*Book E*)
English skills practice (*Book F*)

R.I.C. Publications® follows the guidelines for punctuation and grammar as recommended by the *Style manual for authors, editors and printers*, 2002, 6th edn.

Note, however, that teachers should use their own guide if there is a conflict.

Published by

R.I.C. Publications®

PO Box 332
Greenwood
Western Australia 6924
www.ricpublications.com.au

Copyright Notice

No part of this book may be reproduced in any form or by any means, electronic or mechanical, including photocopying or recording, or by an information retrieval system without written permission from the publisher.



R.I.C. Publications
Low Resolution Images
Display Copy

FOREWORD

In this daily practice workbook you will be able to develop your ability to use English. Each day, you will have questions to answer in the areas of spelling, word study, punctuation and grammar. The 150 days of questions are broken into 15 units of 10 days. Each unit has a focus, which will help to improve your English skills as well as your knowledge about how language works.

At the completion of each set of 10 days, you will have the opportunity to test what you learnt by doing some revision questions.

Your daily scores are recorded in the bubble at the bottom of each day. These daily scores can be transferred onto the record sheets in the front of your book. This will give an overview of your performance for the whole school year.

Be sure to read each question carefully before you answer it. If you find a question too difficult, move on to the next one. If you have time at the end, you can go back to the one you haven't done.

CONTENTS

Record sheets	iv – v	Unit 9	
Unit 1		Days 81–90	42–46
Days 1–10	2–6	Unit 10	
Unit 2		Days 91–100	47–51
Days 11–20	7–11	Unit 11	
Unit 3		Days 101–110	52–56
Days 21–30	12–16	Unit 12	
Unit 4		Days 111–120	57–61
Days 31–40	17–21	Unit 13	
Unit 5		Days 121–130	62–66
Days 41–50	22–26	Unit 14	
Unit 6		Days 131–140	67–71
Days 51–60	27–31	Unit 15	
Unit 7		Days 141–150	72–76
Days 61–70	32–36	Revision days	77–91
Unit 8		Things I need to remember	92
Days 71–80	37–41		

Record sheet

Unit 1		Unit 2		Unit 3		Unit 4	
Date		Date		Date		Date	
Day 1	Day 6	Day 11	Day 16	Day 21	Day 26	Day 31	Day 36
Day 2	Day 7	Day 12	Day 17	Day 22	Day 27	Day 32	Day 37
Day 3	Day 8	Day 13	Day 18	Day 23	Day 28	Day 33	Day 38
Day 4	Day 9	Day 14	Day 19	Day 24	Day 29	Day 34	Day 39
Day 5	Day 10	Day 15	Day 20	Day 25	Day 30	Day 35	Day 40
Revision		Revision		Revision		Revision	
Unit 5		Unit 6		Unit 7		Unit 8	
Date		Date		Date		Date	
Day 41	Day 46	Day 51	Day 56	Day 61	Day 66	Day 71	Day 76
Day 42	Day 47	Day 52	Day 57	Day 62	Day 67	Day 72	Day 77
Day 43	Day 48	Day 53	Day 58	Day 63	Day 68	Day 73	Day 78
Day 44	Day 49	Day 54	Day 59	Day 64	Day 69	Day 74	Day 79
Day 45	Day 50	Day 55	Day 60	Day 65	Day 70	Day 75	Day 80
Revision		Revision		Revision		Revision	

Record sheet

Unit 9		Unit 10		Unit 11		Unit 12	
Date		Date		Date		Date	
Day 81	Day 86	Day 91	Day 96	Day 101	Day 106	Day 111	Day 116
Day 82	Day 87	Day 92	Day 97	Day 102	Day 107	Day 112	Day 117
Day 83	Day 88	Day 93	Day 98	Day 103	Day 108	Day 113	Day 118
Day 84	Day 89	Day 94	Day 99	Day 104	Day 109	Day 114	Day 119
Day 85	Day 90	Day 95	Day 100	Day 105	Day 110	Day 115	Day 120
Revision		Revision		Revision		Revision	
Unit 13		Unit 14		Unit 15			
Date		Date		Date			
Day 121	Day 126	Day 131	Day 136	Day 141	Day 146		
Day 122	Day 127	Day 132	Day 137	Day 142	Day 147		
Day 123	Day 128	Day 133	Day 138	Day 143	Day 148		
Day 124	Day 129	Day 134	Day 139	Day 144	Day 149		
Day 125	Day 130	Day 135	Day 140	Day 145	Day 150		
Revision		Revision		Revision			

DAY 1

- Correct the spelling mistake. _____
How long is a lenth of string?
- Circle the correct spelling. **suprise** **surprise**
- Which word is spelt incorrectly? **braek** **brake**
- In *histry*, the missing vowel is .
- A synonym for *brief* is: _____
soon **short** **near**
- Add the prefix *auto* to one word to make a new word.
marine **biography** _____
- Write as a contraction.
has not _____
- Write the homophone of *hole*. _____
- Separate *friendship* into its syllables.

- Write the plural of *library*. _____
- Complete the punctuation.
my favourite fruits are apples and bananas
- Circle the words that should have capital letters.
australia **beijing** **japanese** **countries**
- Write ! or ?
'Hurry, we need to catch this bus .
- How many nouns? Circle them.
Mai and her mother came on a plane from Vietnam.
- Circle and write the proper noun. _____
Mai loves to perform for an audience.
- Circle the two common nouns.
At the concert, Mai sang three songs.
- Circle the two adjectives.
The big city is a new experience for Mai.
- Circle the proper adjectives.
Mai loves to play Italian, Greek and Irish music.
- Circle the pronoun and the nouns it refers to.
Mai and her mother enjoy walking in the parks where they meet lots of people.
- Circle the pronoun and the noun it refers to.
Mai misses her family, which makes her sad.

MY SCORE

DAY 2

- Correct the spelling mistake. _____
There are vairious ways to stay fit and healthy.
- Circle the incorrect spelling. **probably** **proibly**
- Which word is spelt incorrectly? **noes** **knows**
- Rearrange the letters to make the word that means 'badly behaved'.
aghntuy _____
- An antonym for *predator* is: _____
hunter **prefect** **prey**
- Add the suffix *less* to one word to make a new word.
age **soft** _____
- Write *breath* and *breathe* in the correct places.
When I am short of _____, I try to _____ deeply.
- The part of the words that means *circular* is _____.
bicycle **cyclone** **recycle**
- In the dictionary, comes before *immediate*.
 important **impatient** **imagine**
- Circle the word which does not have the *or* (for) sound.
brought **fought** **mouse** **nought**
- Complete the punctuation.
Jay asked Please may I be excused?
- Add commas to the sentence.
You can see lions bears otters and zebras at the zoo.
- Write ! or ?
'Which way shall we go .
- Circle and write the verbs. _____
Li began a new school and has many new friends.
- Circle the verb group.
Li has been swimming with her friends.
- Circle the verb group.
Tomorrow, Li will be dancing in a competition.
- Circle and write the verb. _____
Yesterday, Li played netball in a tournament.
- Circle and write the adverb. _____
Xao played the violin beautifully.
- Circle and write the adverb. _____
Li and Xao have settled in well at their new school.
- Circle the adverbial of place.
Li and Xao's house is opposite the park.

MY SCORE

DAY 3

- Correct the spelling mistake. _____
Not every question has a simple answer.
- Circle the correct spelling. interest intrest
- Which word is spelt incorrectly? bouy boy
- Circle the correct spelling. natchural natural
- A synonym for **hasty** is: _____
delicious quick important
- Add the prefix **dis** to one word to make a new word.
polite honest _____
- The contraction **must've** is made from the words:
_____ and _____
- Weight** is a homophone of _____.
- Separate **arrival** into its syllables.

- The plural of **monkey** is _____.
- Complete the punctuation.
the ship visited ports in italy, france and spain.
- Add quotation marks to the sentence.
Amir cried, I do love travelling to different countries!
- Add ! or ?
'Which cities are near the coast'
- How many nouns? Circle them.
Alice felt her face go red with embarrassment.
- Circle and write the abstract noun. _____
She had a great fear of the big waves at the beach.
- Circle and write the two nouns. _____
Everyone except Alice was enjoying the water.
- Circle the two adjectives.
As a young girl, Alice loved to play in the salty water.
- Circle the comparative adjective.
But one day, the sea was rougher than usual.
- Circle the pronoun and the noun it refers to.
A huge wave knocked Alice over and dragged her back into the water.
- Circle the noun that the pronoun **she** refers to.
Sue helped Alice as she tried to stand up.

MY SCORE

DAY 4

- Circle the correct spelling. early uryly
- Circle the correct spelling. offen often
- Which word is spelt incorrectly? doe duogh
- Circle the correct spelling. among amung
- An antonym for **certain** is: _____
definite doubtful probable
- Add the suffix **ness** to one word to make a new word.
care weak _____
- Write **allowed** and **aloud** in the correct places.
I am _____ to sing _____, but only in the shower.
- The part of the words that means **sound** is: _____
microphone symphony telephone
- In the dictionary, comes after **occasion**.
 ocean obvious obtain
- Which word does not have the **ou** (out) sound?
 doubt mouse thought plough
- Add an apostrophe to show possession.
The babies nappies needed changing.
- Which is correct? children's toys
 childrens' toys
- Add a comma to the sentence.
A nutritious inexpensive children's menu was available.
- Circle and write the verbs. _____
Chad and Amy help their dad who builds bicycles.
- Circle the verb group.
Their dad has been building bikes for over 30 years.
- Circle the verb group.
Now, Chad and Amy can repair their own bikes.
- Circle and write the modal verb. _____
The twins could run their own bike shop in the future.
- Circle and write the adverb. _____
They have organised their bike shed thoughtfully.
- Circle and write the adverb. _____
The twins work carefully with the bike tools.
- Circle the adverbial of place.
They spend all their spare time in the bike shed.

MY SCORE

DAY 5

- Correct the spelling mistake. _____
Cough medersin sometimes tastes like strawberries.
- Circle the correct spelling. **experiense** **experience**
- Which word is spelt incorrectly? **threw** **through**
- Circle the correct spelling. **escape** **excape**
- A synonym for **clear** is: _____
clean **shiny** **transparent**
- Add the prefix **anti** to one word to make a new word.
social **energy** _____
- Write as a contraction.
might not _____
- Write the homophone of **flower**. _____
- Separate **calculator** into its syllables.

- Write the plural of **address**. _____
- Complete the punctuation.
'What a beautiful bouquet exclaimed georgia.
- Add commas to the sentence.
Tom said 'Yesterday I ran swam and played tennis.'
- Add an apostrophe.
James and lans parents were Don and Delia.
- How many nouns? Circle them.
Zane did his homework then played on his computer.
- Circle and write the non-count noun. _____
His mum wanted him to help with the housework.
- Circle the count nouns.
Zane had left a big mess; his books and games were all over the floor.
- The adjective compares:
 two things more than two things
Zane is the worst in his family for making a mess.
- The adjective compares:
 two things more than two things
Even Zane's 5-year-old brother is better than he is.
- Circle the pronoun and the noun it refers to.
Dad says that although he is messy, Zane is not lazy.
- Circle the pronoun and the noun it refers to.
Zane works in the garden, planting vegetables and harvesting them for Mum to cook.

MY SCORE

DAY 6

- Correct the spelling mistake. _____
The magician can make you dissappear in a flash.
- Circle the correct spelling. **occassion** **occasion**
- Which word is spelt incorrectly? **riegn** **rain**
- Circle the correct spelling. **truely** **truly**
- An antonym for **curious** is: _____
strange **uninterested** **wondrous**
- Add the suffix **ful** to one word to make a new word.
enjoy **harm** _____
- Write **bought** and **brought** in the correct places.
She _____ a gift and _____ it to the party.
- The part of the words that means **far off** is: _____
television **telephone** **telegraph**
- In the dictionary, comes after **height**.
 heard heart history
- Which word does not have the long **a** (make) sound?
 major occasion natural daily
- Complete the punctuation.
What's on TV tonight asked Samir.
- Add a comma to the question.
Are sport music and movies included in the quiz?
- Add apostrophes.
Jims and Erics homework diaries
- Circle the infinitive of the underlined verb.
to be **to have** **to go**
The Eiffel Tower is a famous landmark in Paris, France.
- Circle the verb group.
The Eiffel Tower was completed in 1889.
- Circle the verb group.
You can walk the 600 steps to the second level.
- The verb is in the: past tense present tense
Most visitors ride in the lifts to the three viewing platforms.
- Circle and write the adverb. _____
The Eiffel Tower rises majestically above the city.
- Circle and write the adverb. _____
Stairs to the third level are usually closed to the public.
- Circle the adverbial of time.
Visitors to the Eiffel Tower may have to wait for a few hours in a long queue.

MY SCORE

DAY 7

- Correct the spelling mistake. _____
Febuary is the second month of the year.
- Circle the correct spelling. quarter quater
- Which word is spelt incorrectly? vien vane
- Circle the correct spelling. mystry mystery
- A synonym for **abandon** is: _____
destroy desert support
- Add the prefix **mis** to one word to make a new word.
able fire _____
- The contraction **they're** is made from the words:
_____ and _____
- Morning** is a homophone of _____.
- Separate **removal** into its syllables.

- The plural of **loaf** is: _____
- Circle the words that need capital letters.
at the north pole, january days are cold and dark.
- Add ! or ?
'Have you seen the northern lights' asked Hien.
- Add ! or ?
'There they are' cried Cara.
- How many nouns? Circle them.
A group of birds is sometimes called a flock.
- Circle the collective nouns.
A pack of dogs was chasing a herd of cattle.
- The collective nouns are: singular plural
A colony of penguins was attacked by a pod of seals.
- Which is correct? larger more large
Adult Emperor penguins are than adult Adelie penguins.
- Which is correct? ferociousest
 most ferocious
Leopard seals are one of the marine predators.
- Circle the pronoun and the noun group it refers to.
Female leopard seals are bigger than the males. They can weigh up to 600 kg.
- Circle the pronoun and the noun groups it refers to.
Natural predators of leopard seals are killer whales and great white sharks, but they are not their greatest threat.

MY SCORE

DAY 8

- Correct the spelling mistake. _____
The wizard started his life as an ordinary boy.
- Circle the correct spelling. beleive believe
- Which word is spelt incorrectly? peice peace
- Circle the correct spelling. plastick plastic
- An antonym for **accept** is: _____
except reject receive
- Add the suffix **able** to one word to make a new word.
suit waste _____
- Write **practice** and **practise** in the correct places.
At music _____, we always _____ our scales.
- The prefix **inter** (*international*) means: in
 between
- In the dictionary, comes after **thought**.
 therefore through though
- Which word does not have the **oa** (boat) sound?
 elbow oboe bough smoke
- Add an apostrophe to show possession.
Mondays practice is the last one of the term.
- Circle the correctly punctuated phrase.
the teams' effort the team's effort
- Add a comma or commas to the sentence.
The enthusiastic dedicated team was well rewarded.
- Which pronoun matches the verb?
 I you it we they
Mount Everest is the world's highest mountain.
- Circle the verb group.
Many people would like to climb Mount Everest.
- Circle the verb group.
Many people have died on this mountain.
- The verb is in the: past tense present tense
People are still climbing Mount Everest.
- Circle and write the adverb. _____
Climbers prepare carefully for such a climb.
- Circle and write the adverb. _____
Families hope that climbers return safely.
- Circle the adverbial of time.
The summit of Mount Everest was first reached over 60 years ago.

MY SCORE

DAY 9

- Correct the spelling mistake. _____
The gide showed us around the medieval castle.
- Circle the correct spelling. userly usually
- Which word is spelt incorrectly? horse haorse
- Circle the correct spelling. voyage voyaje
- A synonym for **caught** is: _____
entangled released hidden
- Add the prefix **im** to one word to make a new word.
possible responsible _____
- Write as a contraction.
does not _____
- Write the homophone of **heir**. _____
- Separate **ability** into its syllables.

- Write the plural of **calf**. _____
- Complete the punctuation.
At the end of the day the sun slipped out of sight.
- Add quotation marks to show what was said.
I can't believe you just did that! cried Ava.
- Add an apostrophe to show possession.
The cats tails swayed in unison.
- How many nouns? Circle them.
The name of a young swan is a cygnet.
- Circle the gender nouns.
A male swan is a cob and a female is a pen.
- Circle and write the collective noun. _____
There can be up to eight eggs in each clutch.
- Which is correct? bigger more big
Cobs are usually than pens.
- Which is correct? protectiver
 more protective
Swans are of their young than some birds.
- Circle the pronoun and the noun group it refers to.
Mute swans are quieter than other species but they make a lot of noise with their wings.
- Circle the pronoun and the nouns it refers to.
When they migrate, swans fly in a v-shaped formation called a wedge.

MY SCORE

DAY 10

- Correct the spelling mistake. _____
I change my books at the libery every week.
- Circle the correct spelling. doesn't dosen't
- Which word is spelt incorrectly? caorse course
- Circle the correct spelling. urgent urggent
- An antonym for **regular** is: _____
uniform random always
- Add the suffix **ation** to one word to make a new word.
inform reverse _____
- Write **break** and **brake** in the correct places.
The _____ on the cart could _____ if pulled too hard.
- The prefix **anti** (**anticlockwise**) means: against
 before
- In the dictionary, comes after **devour**.
 devious devote devout
- Which word does not have the **ew** (new) sound?
 queue beauty hood feud
- Complete the punctuation.
If you go to the library can I come too asked Ian
- Add commas to the statement.
I have visited Thailand Vietnam France and Spain.
- Add an apostrophe.
Mum and Dads travel plans
- The pronoun matches the verb:
 I you it we they
World travel is the dream of many people.
- Circle the verb group.
The novel Around the world in 80 days was written by the French writer, Jules Verne.
- Circle and write the verb. _____
The book tells of a journey across the globe.
- The verb is in the: past tense present tense
Phileas Fogg is challenged to travel around the world in 80 days.
- Circle and write the adverb. _____
Fogg accepts the challenge eagerly.
- Circle and write the adverb. _____
Fogg and his servant, Passepartout, leave immediately.
- Circle the adverbial of time.
Eighty days later, Fogg's challengers wait with great hope that he will not succeed.

MY SCORE

DAY 11

- Correct the spelling mistake. _____
Someone who is agresive is ready for an argument.
- Circle the correct spelling. **veyicle** **vehicle**
- Rearrange the letters to spell the word that means **well-known**.
aafiilmr _____
- Circle the correct spelling. **pericular** **particular**
- Often** is a synonym for _____.
frequently **sometimes** **never**
- Add a prefix to give each word the opposite meaning.
_____ **active** _____ **regular**
- Write as a contraction.
should have _____
- Write the homophone of **mussel**. _____
- Separate **persuade** into its syllables. _____
- The plural of **curiosity** is _____.
- Add quotation marks to show what was said.
What a fantastic view! marvelled Dad.
- Add commas to the sentence.
'I can see our house the library the hospital and the school!' cried Bethan excitedly.
- Add capital letters where necessary.
i live at 52 highgate terrace in the town of glasbury.
- Write the concrete noun. _____
The climb to the top of the mountain was tough.
- Write the abstract noun. _____
Jai's progress was slow but his legs kept moving.
- Circle the concrete noun.
He ate his lunch as he gazed at the beautiful view.
- Circle the abstract nouns.
As he walked down the mountain, Jai was lost in memories of his childhood.
- Circle the noun that the pronoun refers to.
The walk had been long, but Jai had enjoyed it.
- Circle the noun that the pronoun refers to.
Jai took off his boots and cleaned their soles with a brush before putting them in the car.
- Circle the pronoun and the nouns it refers to.
Jai and his father shared thoughts about their day and agreed it had been very good for them.

MY SCORE

DAY 12

- Correct the spelling mistake. _____
I took the next available appointment at the dentist.
- Circle the correct spelling. **yacht** **yatch**
- Rearrange the letters to spell the word that means **wonderful**.
aellmorsuv _____
- Circle the correct spelling. **eighth** **eighth**
- Miraculous** is an antonym for _____.
fortunate **disastrous** **shameful**
- Write the word made when the suffix **ness** is added.
happy _____ **sad** _____
- Write **rhyme** and **rhythm** in the correct places.
Put to music, the _____ had a good _____.
- The prefix **semi** (**semicircle**) means: half part
- In the dictionary, _____ comes after **avenue**.
 available **avalanche** **average**
- Choose to complete the words. **ere** **are** **ear**
Prep _____ the p _____ over th _____.
- Complete the punctuation.
That boys results were excellent.
- Add an apostrophe to show possession.
Many neighbours children were at the meeting.
- Add a comma.
Today I shall work hard.
- Write the verb group. _____
These days, we can travel by many forms of transport.
- Which verb tense? **past** **present**
For exercise, you could travel on foot or by bike.
- Insert the verb. **travels** **travel**
He would _____ by bike every day if he could.
- Insert the verb. **take** **takes**
The bus ride may _____ about 20 minutes.
- Write the pronoun.
_____ *might read her book on the train.*
- Write the pronoun.
If necessary, _____ will take his car.
- Write the pronoun.
If _____ can fly to the city, her journey will take much less time.

MY SCORE

DAY 13

- Correct the spelling mistake. _____
I got a briuse when I walked into the open door.
- Circle the correct spelling. **system** **sistem**
- Rearrange the letters to spell the word that means **extremely old**.
aceinnt _____
- Circle the correct spelling. **hite** **height**
- A synonym for **enough** is _____.
excessive **sufficient** **inadequate**
- Add the prefix that means **again**.
_____ **appear** _____ **live**
- The contraction **they'll** is made from the words
_____ and _____.
- Write the homophone of **groan**. _____
- Separate **frequently** into its syllables.

- The plural of **potato** is _____.
- Circle the parenthesis.
My brother, older than me but far less intelligent, is never ready for school on time.
- Add commas to show the parenthesis.
At school Park View Primary I pretend not to know him.
- Add commas to show the parenthesis.
All my friends and I have many think he's really cool.
- Circle the definite articles.
At the beach, we saw a dolphin close to the shore.
- Circle any indefinite articles.
A man in a kayak was very close to the dolphin.
- Write the definite article. _____
The man was really pleased to have seen such a beautiful creature.
- Circle the preposition.
We kept looking at the ocean but the dolphin had gone.
- Write the preposition. _____
We knelt on the sand and dug a huge hole.
- Circle the conjunction.
We sat in the hole and waited for the water to rush in.
- Write the conjunction. _____
The water came in but it did not fill the hole.

MY SCORE

DAY 14

- Correct the spelling mistake. _____
The neighbour's barking dog is a newsance.
- Circle the correct spelling. **simbal** **symbol**
- Rearrange the letters to spell the word that means **first-class**.
ceeellntx _____
- Circle the correct spelling. **seperate** **separate**
- Tense** is an antonym for _____.
different **clumsy** **relaxed**
- Write the new word made by adding the suffix **ous**.
courage _____
outrage _____
- Write **advise** and **advice** in the correct places.
My parents _____ me and give me good _____.
- The prefix **super** (**superstar**) means: above
 great
- In the dictionary, comes after **convenience**.
 correct community conscious
- Which letters complete the words? **tu** or **tch**
frac _____ **re** **pos** _____ **re** **fea** _____ **re**
- Circle the parenthesis.
I am flying to Europe, my first time, to visit my aunt.
- Add commas to show the parenthesis.
While there I still can't believe it I shall visit Austria.
- Add commas to show the parenthesis.
My aunt an artist will meet me in Vienna.
- Circle the common adjective.
Aunt Ella lives in the beautiful city of Vienna.
- Write the common adjective. _____
Marie Antoinette, the famous queen of France, was born in Vienna.
- Circle the proper adjective.
Vienna is the Austrian capital city.
- Write the proper adjective. _____
I will visit Vienna while on a European river cruise.
- Circle the adverb.
Marie Antoinette stood proudly before her execution.
- Write the adverb. _____
The guillotine fell quickly and the queen was dead.
- Circle the adverbs.
The crowd cheered loudly and celebrated wildly.

MY SCORE